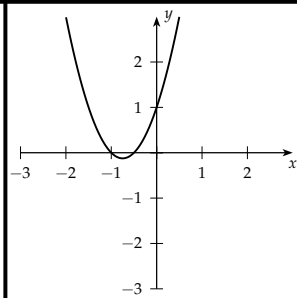
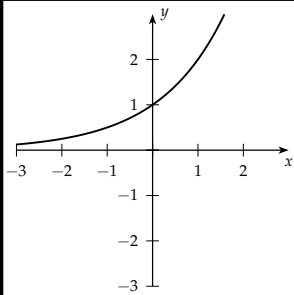


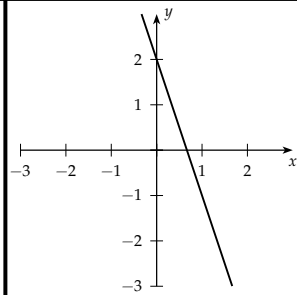
$$f(x) = 2x^2 + 3x + 1$$



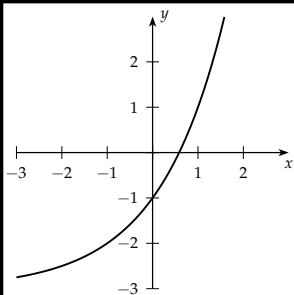
$$f(x) = 2^x$$



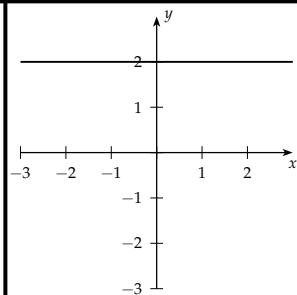
$$f(x) = -3x + 2$$



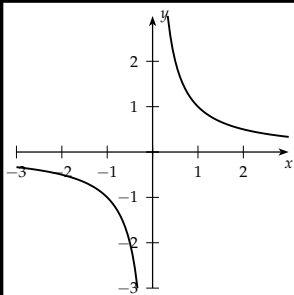
$$f(x) = 2(2^x) - 3$$



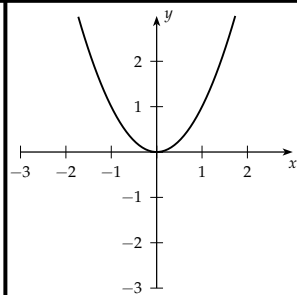
$$f(x) = 2$$



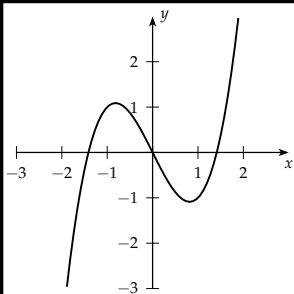
$$f(x) = \frac{1}{x}$$



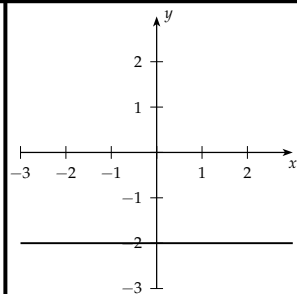
$$f(x) = x^2$$



$$f(x) = x^3 - 2x$$



$$f(x) = -2$$



$$f(x) = -3(0.5^x) + 2$$